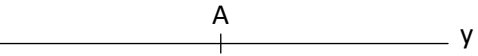
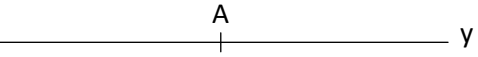








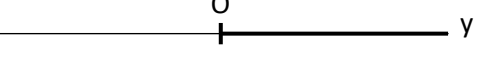
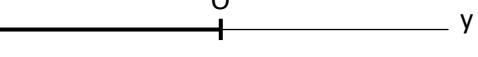
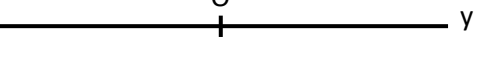
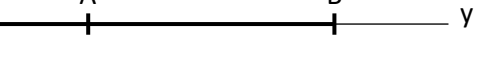




Exercice 1

Repasser en couleur la partie du dessin indiquée :

1. x  y **(xy)**
2. x  y **[Ay]**
3. x  y **[MN]**
4. x  y **[Mx]**
5.  **[IJ]**
6.  **[IJ]**
7.  **(IJ)**
8.  **(IJ)**



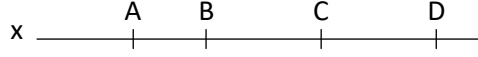





Exercice 2

Indiquer le nom de la partie en gras sur le dessin:

1. x  y
2. x  y
3. x  y
4. x  y
5. x  y
6. x  y
7. x  y
8. x  y





Exercice 3

Repasser en couleur la partie du dessin indiquée :

1. x  y **[AC]**
2. x  y **[BD]**
3. x  y **[CA]**
4. x  y **[DC]**
5. x  y **[By]**
6. x  y **[Cx]**
7. x  y **[Dx]**
8. x  y **[Ax]**

Exercice 4

Indiquer le nom de la partie en gras sur le dessin:

1. x  y
2. x  y
3. x  y
4. x  y